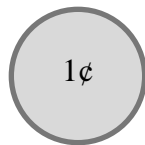


Money & Coins

Count coins and solve money questions.

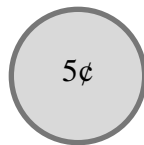
Name: _____ Date: _____

Part A — Name the Coins



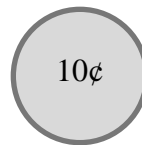
1¢

Penny



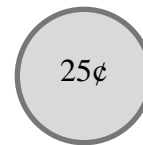
5¢

Nickel



10¢

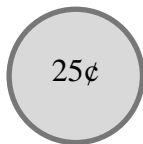
Dime



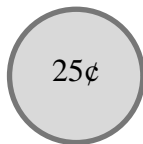
25¢

Quarter

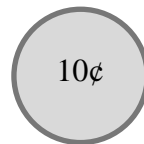
Part B — Count the Coins



25¢

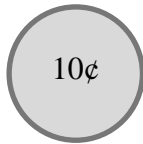


25¢

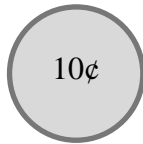


10¢

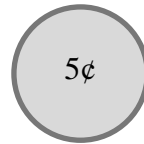
Total: _____



10¢

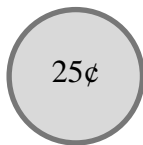


10¢

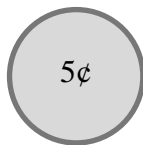


5¢

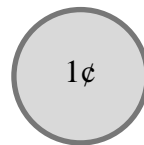
Total: _____



25¢



5¢

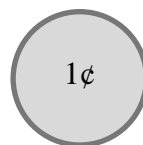


1¢

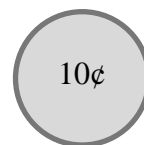
Total: _____

Part C — Circle the Correct Coin

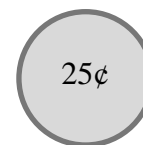
Which coin is worth 10¢?



1¢

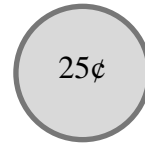
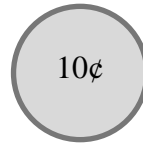
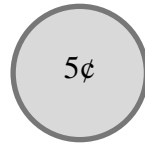


10¢



25¢

Which coin is worth 25¢?



Part D — Word Problems

1. Liam has 2 quarters. How much money does he have? _____

2. Emma has 1 dime and 1 nickel. How much money does she have? _____

3. Ava has 3 pennies. How much money does she have? _____

Part B

1. 60¢
2. 25¢
3. 31¢

Part C

1. Dime
2. Quarter

Part D

1. 50¢
2. 15¢
3. 3¢