

Elapsed Time

Practice before, after, and schedule-based time problems.

Name: _____ Date: _____

Part A — What Time Comes Next?

1. 1 hour after 3:00 = _____


2. 30 minutes after 5:00 = _____

3. 1 hour before 8:00 = _____

4. 30 minutes before 10:30 = _____

5. 2 hours after 7:00 = _____


Part B — Look at the Clocks




1 hour later: _____




30 min later: _____




2 hours later: _____



30 min before: _____



1 hour before: _____



1 hour later: _____

Part C — Daily Schedule

Activity	Time
----------	------

Wake Up	7:00 AM
School Starts	8:30 AM
Lunch	12:00 PM
School Ends	3:00 PM

1. How many hours after wake up does school start? _____

2. What time is lunch? _____

3. How many hours after lunch does school end? _____

Part D — Challenge Questions

1. Mia starts reading at 4:00 and reads for 1 hour. What time does she finish? _____

2. Soccer practice starts at 5:30 and ends 30 minutes later. What time does it end? _____

3. A movie starts at 2:00 and lasts 2 hours. What time does it finish? _____

Answer Key — Elapsed Time

Part A

1. 4:00
2. 5:30
3. 7:00
4. 10:00
5. 9:00

Part B

1. 4:00
2. 7:00
3. 11:00
4. 2:00
5. 4:00
6. 12:30

Part C

1. 1.5 hours
2. 12:00 PM
3. 3 hours

Part D

1. 5:00
2. 6:00
3. 4:00