


Learning About Shapes


Learn to name and identify 2D shapes!

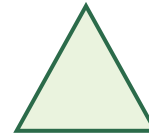
Name: _____

Date: _____


Name the Shape














How Many Sides?



A triangle has _____ sides.




A square has _____ sides.




A rectangle has _____ sides.


Draw the Shape



Draw a circle



Draw a square



Draw a triangle

Answer Key — Learning About Shapes

Section 1: Name the Shape

1. **Circle**
2. **Square**
3. **Triangle**
4. **Rectangle**
5. **Oval**
6. **Diamond**

Section 2: How Many Sides?

- Triangle = 3 sides
- Square = 4 sides
- Rectangle = 4 sides

Section 3: Draw the Shape

Student drawings will vary. Check that shapes are recognizable.